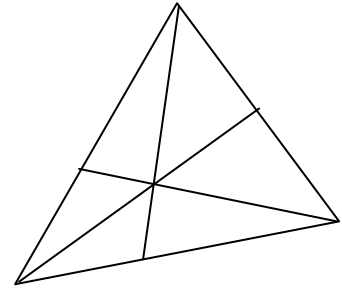



How many?

1. How many triangles (of all sizes) are there in this sketch?




2. How many rectangles of all sizes are there in this figure?



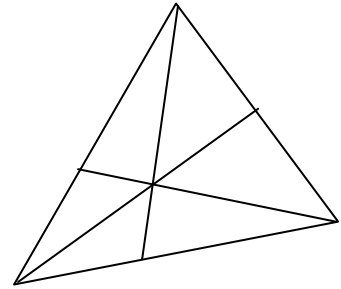
3. How many squares (of all sizes) are there on a standard 8×8 chess board?

The answer is not 64 😊



Hoeveel?

1. Hoeveel driehoeken (van alle groottes) is daar altesaam in hierdie skets?



2. Hoeveel reghoeke van alle groottes is daar in hierdie figuur?



3. Hoeveel vierkante van alle groottes is daar op 'n standaard 8x8 skaakbord?

Die antwoord is nie 64 nie 😊

